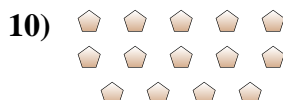
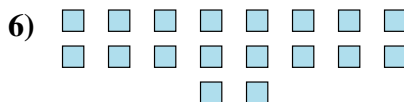

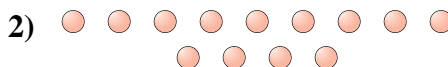


Determine if the number of shapes is even or odd.



Answers

1. \_\_\_\_\_

2. \_\_\_\_\_

3. \_\_\_\_\_

4. \_\_\_\_\_

5. \_\_\_\_\_

6. \_\_\_\_\_

7. \_\_\_\_\_

8. \_\_\_\_\_

9. \_\_\_\_\_

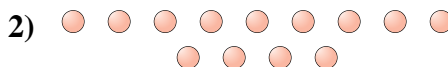
10. \_\_\_\_\_




Determine if the number of shapes is even or odd.



9



13



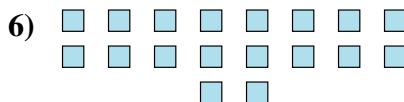
19



15



17



18



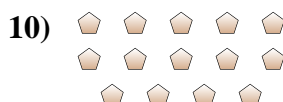
15



5



10



14

Answers

1. odd

2. odd

3. odd

4. odd

5. odd

6. even

7. odd

8. odd

9. even

10. even